

# Foi de lucru - Matematica!

Andrei cumpara 2 Pachete Creioane.Cate creioane va avea Simon?



..... Creioane

Radu adauga 2 Mingi. Cate mingi va avea el?



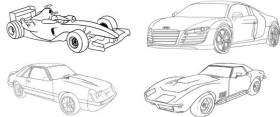
Jan hat ..... Mingi

3 Paianjeni vin pe panza.Cati paianjeni sunt acum?



..... Paianjeni

Aurelio vrea dublu masini cate are. Cate masini va avea?



..... Masini

## Foi de lucru - Matematica!

Andrei cumpara 2 Pachete Creioane.Cate creioane va avea Simon?




..... Creioane

Radu adauga 2 Mingi. Cate mingi va avea el?




Jan hat ..... Mingi

3 Paianjeni vin pe panza.Cati paianjeni sunt acum?



..... Paianjeni

Aurelio vrea dublu masini cate are. Cate masini va avea?



..... Masini

## Foi de lucru - Matematica!

Andrei cumpara 2 Pachete Creioane.Cate creioane va avea Simon?



..... Creioane

Radu adauga 2 Mingi. Cate mingi va avea el?




Jan hat ..... Mingi

3 Paianjeni vin pe panza.Cati paianjeni sunt acum?



..... Paianjeni

Aurelio vrea dublu masini cate are. Cate masini va avea?



..... Masini

## Foi de lucru - Matematica!

Andrei cumpara 2 Pachete Creioane.Cate creioane va avea Simon?




..... Creioane

Radu adauga 2 Mingi. Cate mingi va avea el?




Jan hat ..... Mingi

3 Paianjeni vin pe panza.Cati paianjeni sunt acum?



..... Paianjeni

Aurelio vrea dublu masini cate are. Cate masini va avea?



..... Masini

# Foi de lucru - Matematica!

Andrei cumpara 2 Pachete Creioane.Cate creioane va avea Simon?



..... Creioane

Radu adauga 2 Mingi. Cate mingi va avea el?



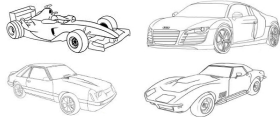
Jan hat ..... Mingi

3 Paianjeni vin pe panza.Cati paianjeni sunt acum?



..... Paianjeni

Aurelio vrea dublu masini cate are. Cate masini va avea?



..... Masini

## Foi de lucru - Matematica!

Andrei cumpara 2 Pachete Creioane.Cate creioane va avea Simon?




..... Creioane

Radu adauga 2 Mingi. Cate mingi va avea el?




Jan hat ..... Mingi

3 Paianjeni vin pe panza.Cati paianjeni sunt acum?



..... Paianjeni

Aurelio vrea dublu masini cate are. Cate masini va avea?



..... Masini

## Foi de lucru - Matematica!

Andrei cumpara 2 Pachete Creioane.Cate creioane va avea Simon?




..... Creioane

Radu adauga 2 Mingi. Cate mingi va avea el?




Jan hat ..... Mingi

3 Paianjeni vin pe panza.Cati paianjeni sunt acum?



..... Paianjeni

Aurelio vrea dublu masini cate are. Cate masini va avea?



..... Masini

## Foi de lucru - Matematica!

Andrei cumpara 2 Pachete Creioane.Cate creioane va avea Simon?




..... Creioane

Radu adauga 2 Mingi. Cate mingi va avea el?




Jan hat ..... Mingi

3 Paianjeni vin pe panza.Cati paianjeni sunt acum?



..... Paianjeni

Aurelio vrea dublu masini cate are. Cate masini va avea?



..... Masini



## Foi de lucru - Matematica!

Andrei cumpara 2 Pachete Creioane.Cate creioane va avea Simon?




..... Creioane

Radu adauga 2 Mingi. Cate mingi va avea el?




Jan hat ..... Mingi

3 Paianjeni vin pe panza.Cati paianjeni sunt acum?



..... Paianjeni

Aurelio vrea dublu masini cate are. Cate masini va avea?



..... Masini

## Foi de lucru - Matematica!

Andrei cumpara 2 Pachete Creioane.Cate creioane va avea Simon?




..... Creioane

Radu adauga 2 Mingi. Cate mingi va avea el?




Jan hat ..... Mingi

3 Paianjeni vin pe panza.Cati paianjeni sunt acum?



..... Paianjeni

Aurelio vrea dublu masini cate are. Cate masini va avea?



..... Masini