

Foi de lucru - Matematica!

Cate patrate vezi?



= _____



= _____



= _____



= _____



= _____

Cate cercuri sunt?



= _____



= _____



= _____




= _____




= _____

Foi de lucru - Matematica!


Cate patrate vezi?



= _____




= _____



= _____



= _____



= _____


Cate cercuri sunt?



= _____



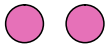
= _____



= _____




= _____



= _____

Foi de lucru - Matematica!

Cate patrate vezi?

 = _____

 = _____

 = _____


 = _____


 = _____

Cate cercuri sunt?

 = _____

 = _____


 = _____

 = _____

 = _____

Foi de lucru - Matematica!

Cate patrate vezi?



= _____



= _____



= _____



= _____



= _____

Cate cercuri sunt?




= _____




= _____



= _____




= _____



= _____

Foi de lucru - Matematica!

Cate patrate vezi?



= _____



= _____



= _____



= _____



= _____

Cate cercuri sunt?




= _____




= _____



= _____



= _____



= _____

Foi de lucru - Matematica!

Cate patrate vezi?



= _____



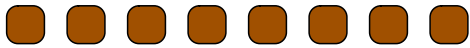
= _____



= _____



= _____




= _____


Cate cercuri sunt?




= _____



= _____



= _____




= _____



= _____

Foi de lucru - Matematica!

Cate patrate vezi?



= _____



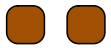
= _____



= _____



= _____



= _____

Cate cercuri sunt?




= _____



= _____



= _____



= _____



= _____

Foi de lucru - Matematica!

Cate patrate vezi?



= _____



= _____



= _____




= _____




= _____


Cate cercuri sunt?




= _____



= _____



= _____



= _____



= _____

Foi de lucru - Matematica!

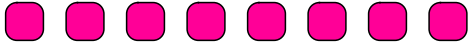
Cate patrate vezi?



= _____



= _____



= _____




= _____



= _____


Cate cercuri sunt?




= _____



= _____



= _____



= _____




= _____

Foi de lucru - Matematica!

Cate patrate vezi?

 = _____

 = _____

 = _____

 = _____


 = _____

Cate cercuri sunt?

 = _____

 = _____

 = _____

 = _____

 = _____